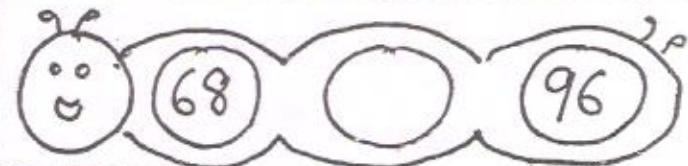



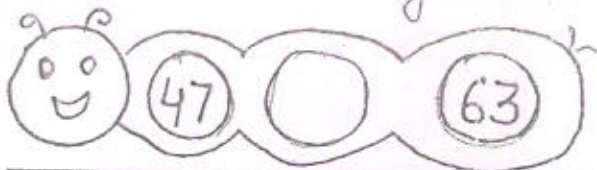
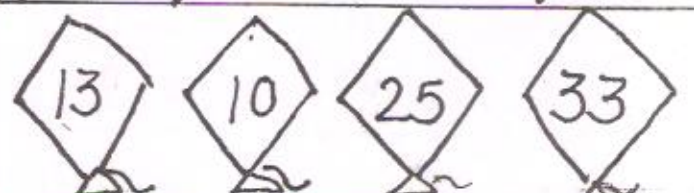




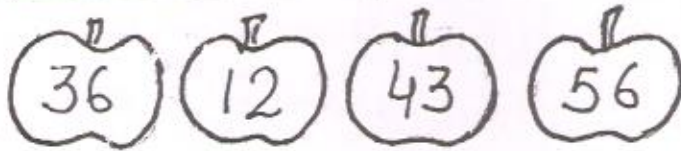


Class I Maths







Q1. Put the sign $>$ $<$ or $=$



Q2. Colour the picture with smallest number :-



Q3. Circle the greatest number :-



One More Than

- | more than 12 is _____
- | more than 29 is _____
- | more than 33 is _____
- | more than 47 is _____
- | more than 54 is _____
- | more than 68 is _____
- | more than 75 is _____
- | more than 81 is _____
- | more than 10 is _____
- | more than 99 is _____
- | more than 26 is _____
- | more than 57 is _____
- | more than 84 is _____

One Less Than

- | less than 10 is _____
- | less than 39 is _____
- | less than 56 is _____
- | less than 100 is _____
- | less than 74 is _____
- | less than 28 is _____
- | less than 83 is _____
- | less than 92 is _____
- | less than 47 is _____
- | less than 81 is _____
- | less than 65 is _____
- | less than 50 is _____
- | less than 91 is _____

Q. Subtract sums: →

$$\begin{array}{r} 9 \\ - 5 \\ \hline \end{array} \quad \begin{array}{r} 7 \\ - 2 \\ \hline \end{array} \quad \begin{array}{r} 5 \\ - 0 \\ \hline \end{array} \quad \begin{array}{r} 6 \\ - 3 \\ \hline \end{array} \quad \begin{array}{r} 8 \\ - 4 \\ \hline \end{array} \quad \begin{array}{r} 4 \\ - 1 \\ \hline \end{array}$$

$$\begin{array}{r} 24 \\ - 12 \\ \hline \end{array} \quad \begin{array}{r} 56 \\ - 14 \\ \hline \end{array} \quad \begin{array}{r} 77 \\ - 26 \\ \hline \end{array} \quad \begin{array}{r} 82 \\ - 10 \\ \hline \end{array} \quad \begin{array}{r} 95 \\ - 64 \\ \hline \end{array}$$